












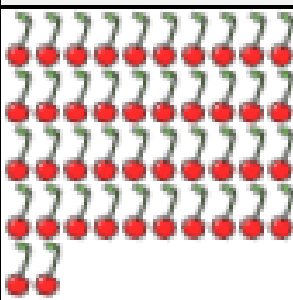
























## Compare objects within 50



Complete the comparisons.

- | <p><b>a</b></p> <p>Sue and Ben each have some pencils.<br/>Who has the most pencils?</p> <p>_____ is more than _____</p> <p>_____ is less than _____</p> <p>_____ has more pencils.</p>    | <table border="1" style="width: 100%; border-collapse: collapse;"> <tr> <th style="width: 50%; padding: 5px;">Sue</th> <th style="width: 50%; padding: 5px;">Ben</th> </tr> <tr> <td style="text-align: center; padding: 10px;">  </td> <td style="text-align: center; padding: 10px;">  </td> </tr> </table>     | Sue   | Ben   |    |    |  |
|--|--|---|---|--|---|--|
| Sue  | Ben  |   |   |  |   |  |
|    |   |   |   |  |   |  |
| <p><b>b</b></p> <p>Mo and Asha each have some sweets.<br/>Who has the most sweets?</p> <p>_____ is more than _____</p> <p>_____ is less than _____</p> <p>_____ has more sweets.</p>       | <table border="1" style="width: 100%; border-collapse: collapse;"> <tr> <th style="width: 50%; padding: 5px;">Mo</th> <th style="width: 50%; padding: 5px;">Asha</th> </tr> <tr> <td style="text-align: center; padding: 10px;">  </td> <td style="text-align: center; padding: 10px;">  </td> </tr> </table>     | Mo  | Asha  |    |    |  |
| Mo   | Asha   |   |   |  |   |  |
|    |   |   |   |  |   |  |
| <p><b>c</b></p> <p>Kat and Dom each have some cherries.<br/>Who has the most cherries?</p> <p>_____ is more than _____</p> <p>_____ is less than _____</p> <p>_____ has more cherries.</p> | <table border="1" style="width: 100%; border-collapse: collapse;"> <tr> <th style="width: 50%; padding: 5px;">Kat</th> <th style="width: 50%; padding: 5px;">Dom</th> </tr> <tr> <td style="text-align: center; padding: 10px;">  </td> <td style="text-align: center; padding: 10px;">  </td> </tr> </table> | Kat   | Dom   |  |  |  |
| Kat  | Dom  |   |   |  |   |  |
|    |   |   |   |  |   |  |
| <p><b>d</b></p> <p>_____ is less than _____</p> <p>_____ is more than _____</p>  | <table border="1" style="width: 100%; border-collapse: collapse;"> <tr> <td style="width: 50%; text-align: center; padding: 10px;">  </td> <td style="width: 50%; text-align: center; padding: 10px;">  </td> </tr> </table>   |  |  |  |   |  |
|   |   |   |   |  |   |  |
| <p><b>e</b></p> <p>_____ is less than _____</p> <p>_____ is more than _____</p>  | <table border="1" style="width: 100%; border-collapse: collapse;"> <tr> <td style="width: 50%; text-align: center; padding: 10px;">  </td> <td style="width: 50%; text-align: center; padding: 10px;">  </td> </tr> </table>   |  |  |  |   |  |
|   |   |   |   |  |   |  |
| <p><b>f</b></p> <p>_____ is more than _____</p> <p>_____ is less than _____</p>  | <table border="1" style="width: 100%; border-collapse: collapse;"> <tr> <td style="width: 50%; text-align: center; padding: 10px;">  </td> <td style="width: 50%; text-align: center; padding: 10px;">  </td> </tr> </table>   |  |  |  |   |  |
|   |   |   |   |  |   |  |