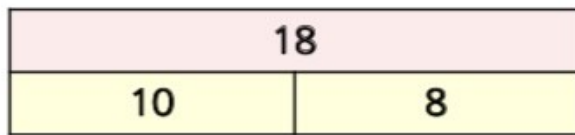


# Related facts – Bar models



1 Use the bar models to help you complete the related facts.




$$\underline{\quad} + \underline{\quad} = 18$$

$$\underline{\quad} + \underline{\quad} = 18$$

$$18 - \underline{\quad} = \underline{\quad}$$

$$18 - \underline{\quad} = \underline{\quad}$$




$$\underline{\quad} + \underline{\quad} = 15$$

$$\underline{\quad} + \underline{\quad} = 15$$

$$15 - \underline{\quad} = \underline{\quad}$$

$$15 - \underline{\quad} = \underline{\quad}$$

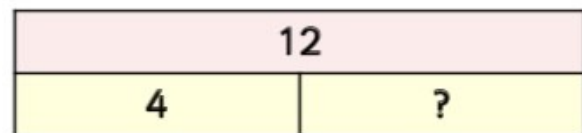


$$\underline{\quad} + \underline{\quad} = 14$$

$$\underline{\quad} + \underline{\quad} = 14$$

$$14 - \underline{\quad} = \underline{\quad}$$

$$14 - \underline{\quad} = \underline{\quad}$$

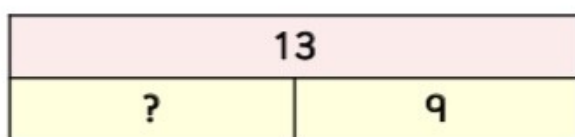


$$4 + \underline{\quad} = \underline{\quad}$$

$$\underline{\quad} + 4 = \underline{\quad}$$

$$\underline{\quad} - 4 = \underline{\quad}$$

$$\underline{\quad} - \underline{\quad} = 4$$



$$\underline{\quad} + \underline{\quad} = 13$$

$$\underline{\quad} + \underline{\quad} = 13$$

$$13 - \underline{\quad} = \underline{\quad}$$

$$13 - \underline{\quad} = \underline{\quad}$$



$$\underline{\quad} + 6 = \underline{\quad}$$

$$6 + \underline{\quad} = \underline{\quad}$$

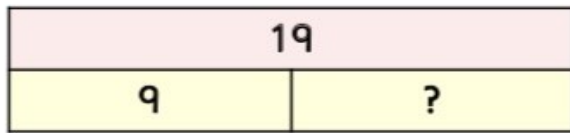
$$\underline{\quad} - \underline{\quad} = 6$$

$$\underline{\quad} - 6 = \underline{\quad}$$

# Related facts – Bar models



1 Use the bar models to help you complete the related facts.

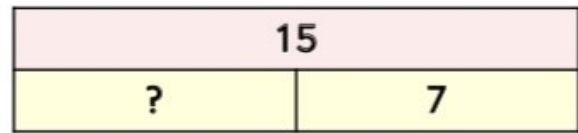


$$\underline{\quad} + \underline{\quad} = \underline{\quad}$$

$$\underline{\quad} + \underline{\quad} = \underline{\quad}$$

$$\underline{\quad} - \underline{\quad} = \underline{\quad}$$

$$\underline{\quad} - \underline{\quad} = \underline{\quad}$$



$$\underline{\quad} + \underline{\quad} = \underline{\quad}$$

$$\underline{\quad} + \underline{\quad} = \underline{\quad}$$

$$\underline{\quad} - \underline{\quad} = \underline{\quad}$$

$$\underline{\quad} - \underline{\quad} = \underline{\quad}$$

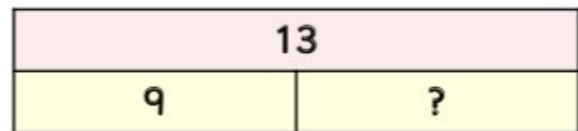


$$\underline{\quad} + \underline{\quad} = \underline{\quad}$$

$$\underline{\quad} + \underline{\quad} = \underline{\quad}$$

$$\underline{\quad} - \underline{\quad} = \underline{\quad}$$

$$\underline{\quad} - \underline{\quad} = \underline{\quad}$$

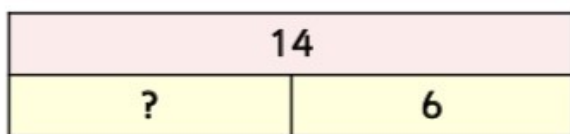


$$\underline{\quad} + \underline{\quad} = \underline{\quad}$$

$$\underline{\quad} + \underline{\quad} = \underline{\quad}$$

$$\underline{\quad} - \underline{\quad} = \underline{\quad}$$

$$\underline{\quad} - \underline{\quad} = \underline{\quad}$$

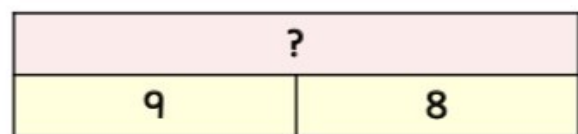


$$\underline{\quad} + \underline{\quad} = \underline{\quad}$$

$$\underline{\quad} + \underline{\quad} = \underline{\quad}$$

$$\underline{\quad} - \underline{\quad} = \underline{\quad}$$

$$\underline{\quad} - \underline{\quad} = \underline{\quad}$$



$$\underline{\quad} + \underline{\quad} = \underline{\quad}$$

$$\underline{\quad} + \underline{\quad} = \underline{\quad}$$

$$\underline{\quad} - \underline{\quad} = \underline{\quad}$$

$$\underline{\quad} - \underline{\quad} = \underline{\quad}$$