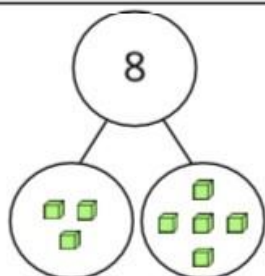


Related facts – Part whole models



1 Use the part-whole diagrams to complete the related facts.

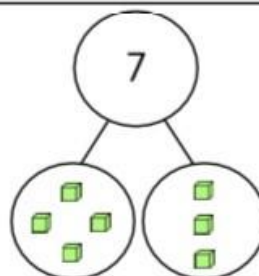


$$\underline{\quad\quad} + \underline{\quad\quad} = 8$$

$$\underline{\quad\quad} + \underline{\quad\quad} = 8$$

$$8 - \underline{\quad\quad} = \underline{\quad\quad}$$

$$8 - \underline{\quad\quad} = \underline{\quad\quad}$$

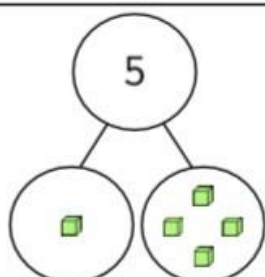


$$\underline{\quad\quad} + \underline{\quad\quad} = 7$$

$$\underline{\quad\quad} + \underline{\quad\quad} = 7$$

$$7 - \underline{\quad\quad} = \underline{\quad\quad}$$

$$7 - \underline{\quad\quad} = \underline{\quad\quad}$$

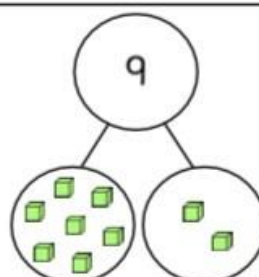


$$\underline{\quad\quad} + \underline{\quad\quad} = 5$$

$$\underline{\quad\quad} + \underline{\quad\quad} = 5$$

$$5 - \underline{\quad\quad} = \underline{\quad\quad}$$

$$5 - \underline{\quad\quad} = \underline{\quad\quad}$$

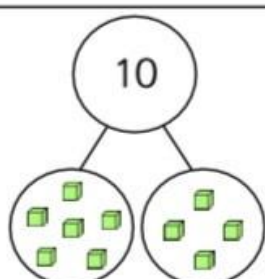


$$\underline{\quad\quad} + \underline{\quad\quad} = 9$$

$$\underline{\quad\quad} + \underline{\quad\quad} = 9$$

$$9 - \underline{\quad\quad} = \underline{\quad\quad}$$

$$9 - \underline{\quad\quad} = \underline{\quad\quad}$$

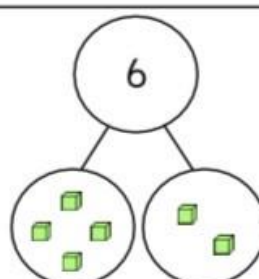


$$\underline{\quad\quad} + \underline{\quad\quad} = 10$$

$$\underline{\quad\quad} + \underline{\quad\quad} = 10$$

$$10 - \underline{\quad\quad} = \underline{\quad\quad}$$

$$10 - \underline{\quad\quad} = \underline{\quad\quad}$$



$$\underline{\quad\quad} + \underline{\quad\quad} = 6$$

$$\underline{\quad\quad} + \underline{\quad\quad} = 6$$

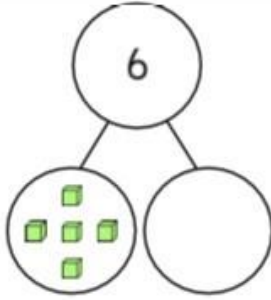
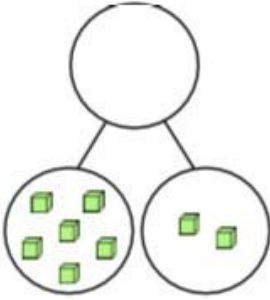
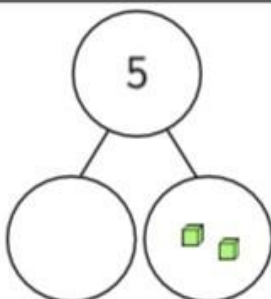
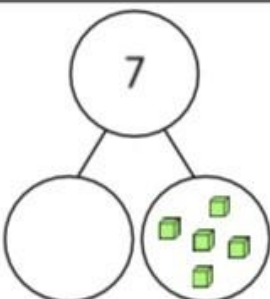

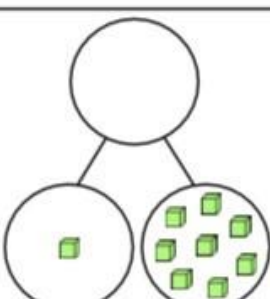
$$6 - \underline{\quad\quad} = \underline{\quad\quad}$$

$$6 - \underline{\quad\quad} = \underline{\quad\quad}$$

Related facts – Part whole models



1 Complete the part-whole diagrams to help you complete the related facts.

 $\underline{\quad\quad} + \underline{\quad\quad} = \underline{\quad\quad}$ $\underline{\quad\quad} + \underline{\quad\quad} = \underline{\quad\quad}$ $\underline{\quad\quad} - \underline{\quad\quad} = \underline{\quad\quad}$ $\underline{\quad\quad} - \underline{\quad\quad} = \underline{\quad\quad}$	 $\underline{\quad\quad} + \underline{\quad\quad} = \underline{\quad\quad}$ $\underline{\quad\quad} + \underline{\quad\quad} = \underline{\quad\quad}$ $\underline{\quad\quad} - \underline{\quad\quad} = \underline{\quad\quad}$ $\underline{\quad\quad} - \underline{\quad\quad} = \underline{\quad\quad}$
 $\underline{\quad\quad} + \underline{\quad\quad} = \underline{\quad\quad}$ $\underline{\quad\quad} + \underline{\quad\quad} = \underline{\quad\quad}$ $\underline{\quad\quad} - \underline{\quad\quad} = \underline{\quad\quad}$ $\underline{\quad\quad} - \underline{\quad\quad} = \underline{\quad\quad}$	 $\underline{\quad\quad} + \underline{\quad\quad} = \underline{\quad\quad}$ $\underline{\quad\quad} + \underline{\quad\quad} = \underline{\quad\quad}$ $\underline{\quad\quad} - \underline{\quad\quad} = \underline{\quad\quad}$ $\underline{\quad\quad} - \underline{\quad\quad} = \underline{\quad\quad}$
 $\underline{\quad\quad} + \underline{\quad\quad} = \underline{\quad\quad}$ $\underline{\quad\quad} + \underline{\quad\quad} = \underline{\quad\quad}$ $\underline{\quad\quad} - \underline{\quad\quad} = \underline{\quad\quad}$ $\underline{\quad\quad} - \underline{\quad\quad} = \underline{\quad\quad}$	 $\underline{\quad\quad} + \underline{\quad\quad} = \underline{\quad\quad}$ $\underline{\quad\quad} + \underline{\quad\quad} = \underline{\quad\quad}$ $\underline{\quad\quad} - \underline{\quad\quad} = \underline{\quad\quad}$ $\underline{\quad\quad} - \underline{\quad\quad} = \underline{\quad\quad}$