

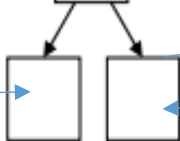
Calculation:

$$\boxed{7} + \boxed{4} = \boxed{}$$

so

$$\boxed{10} + \boxed{} = \boxed{}$$

What would you
add to 7 to make
10



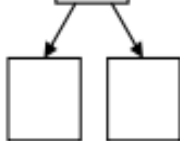
How many do you have left from
your 4?

Calculation:

$$\boxed{9} + \boxed{2} = \boxed{}$$

so

$$\boxed{10} + \boxed{} = \boxed{}$$

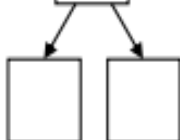


Calculation:

$$\boxed{8} + \boxed{5} = \boxed{}$$

so

$$\boxed{10} + \boxed{} = \boxed{}$$

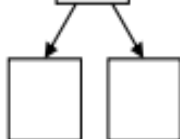


Calculation:

$$\boxed{9} + \boxed{4} = \boxed{}$$

so

$$\boxed{10} + \boxed{} = \boxed{}$$

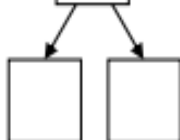


Calculation:

$$\boxed{6} + \boxed{5} = \boxed{}$$

so

$$\boxed{10} + \boxed{} = \boxed{}$$



Calculation:

$$\boxed{3} + \boxed{9} = \boxed{}$$

so

$$\boxed{10} + \boxed{} = \boxed{}$$

