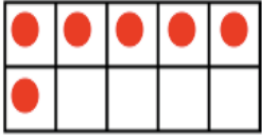
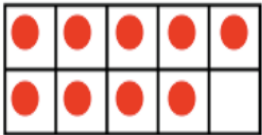


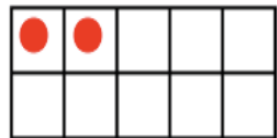
1) \_\_\_\_\_ + \_\_\_\_\_ = 10



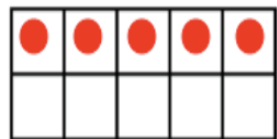
2) \_\_\_\_\_ + \_\_\_\_\_ = 10



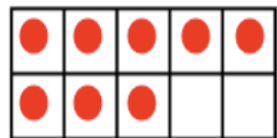
3) \_\_\_\_\_ + \_\_\_\_\_ = 10



4) \_\_\_\_\_ + \_\_\_\_\_ = 10



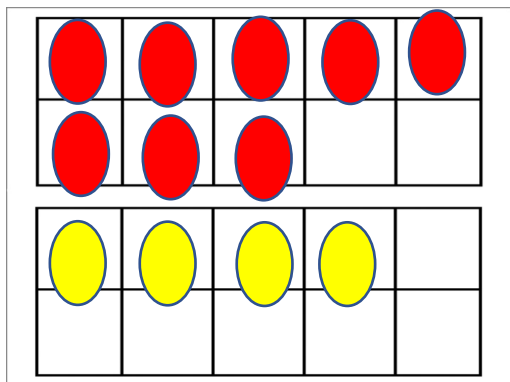
5) \_\_\_\_\_ + \_\_\_\_\_ = 10




6) \_\_\_\_\_ + \_\_\_\_\_ = 10

Can you make this addition sentence by filling up the next tens frames and then rewriting the number sentence?

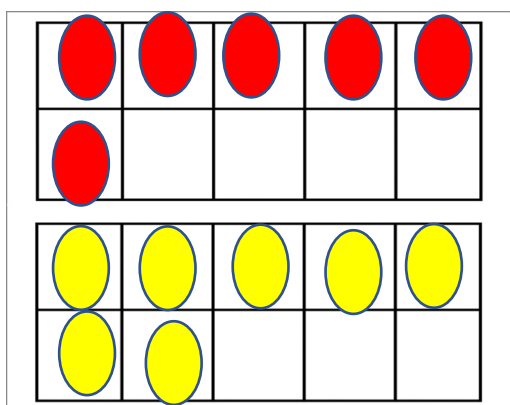
1)  $8+4=12$



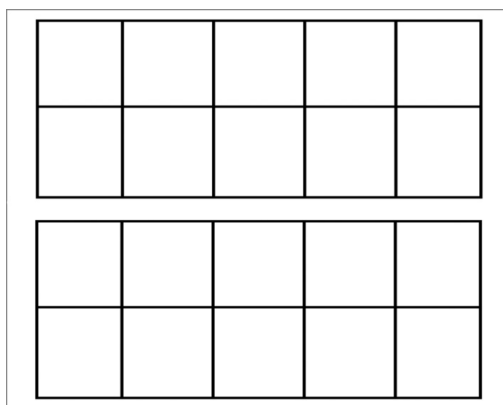
\_\_\_\_\_ + \_\_\_\_\_ = 12



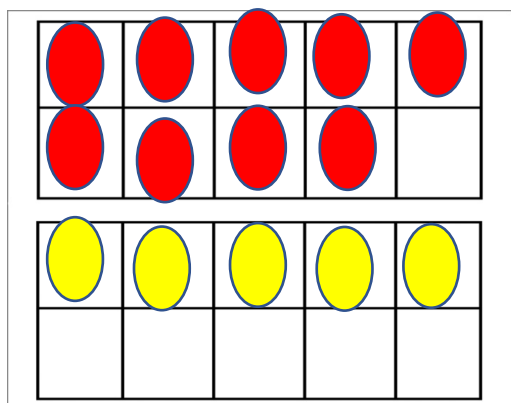
2)  $6+7=13$



\_\_\_\_\_ + \_\_\_\_\_ = 13



3)  $9+5=14$



\_\_\_\_\_ + \_\_\_\_\_ = 14

