


# Hours and days

1 Starting from midnight, show every hour on the clocks for a full day.



2 Complete the sentences.

- a There are \_\_\_\_\_ hours in a day.
- b There are \_\_\_\_\_ hours in half a day.
- c There are \_\_\_\_\_ hours in a quarter of a day.
- d There are \_\_\_\_\_ hours in three quarters of a day.
- e There are \_\_\_\_\_ hours in a third of a day.
- f There are \_\_\_\_\_ hours in two thirds of a day.

# Hours and days

1 Tick (✓) longest duration of time.

a 1 hours and 5 minutes

70 minutes

c 1 hour and 55 minutes

110 minutes

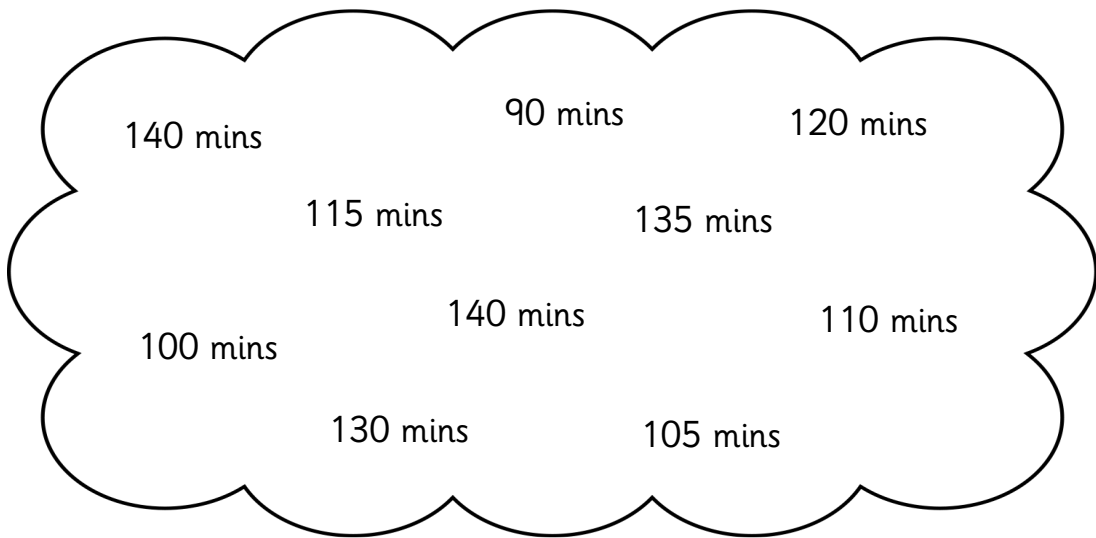
b 120 minutes

2 hours and 5 minutes

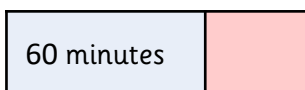

d 85 minutes

1 hour and 30 minutes

2 Circle all the durations that are less than 2 hours.



3 Match the bars to the times.



Half an hour

1 and  $\frac{1}{2}$  hours

2 hours

# Hours and days



1 Complete the table.

Hours and minutes	Minutes
1 hour and 20 minutes	
1 hour and 10 minutes	
1 hour	
1 hour and 50 minutes	
2 hours	
Half an hour	
1 hour and 30 minutes	
Quarter of an hour	
1 hour and 40 minutes	

# Hours and days



1 Complete the table.

Hours and minutes	Minutes
1 hour and 20 minutes	
1 hour and 10 minutes	
1 hour	
	105 minutes
2 hours	
Half an hour	
	90 minutes
Quarter of an hour	
1 hour 25 minutes	
1 hour and 40 minutes	
	65 minutes
1 hour 15 minutes	
1 hour 55 minutes	
	95 minutes

# Hours and days



1 Complete the table.

Hours and minutes	Minutes
1 hour and 22 minutes	
1 hour and 14 minutes	
	69 minutes
1 hour and 37 minutes	
2 hours and 8 minutes	
	137 minutes
1 hour and 46 minutes	
1 hour and 17 minutes	
	89 minutes
1 hour and 3 minutes	
	101 minutes
3 hours 7 minutes	
	232 minutes
3 hours 34 minutes	