

Year 3 Maths Activity Mat

①

Section 1

$$724 + 106 = \boxed{}$$


$$406 + \boxed{} = 639$$

Section 2

What is $\frac{2}{8}$ of 24?

What is $\frac{2}{10}$ of 90?

Section 3



What time is this?

What time will it be in 2 hours and ten minutes?

Section 4

At Bessie's Farm, 310 eggs were collected. 216 of them were sold. How many eggs were left?

	H	T	O
—			

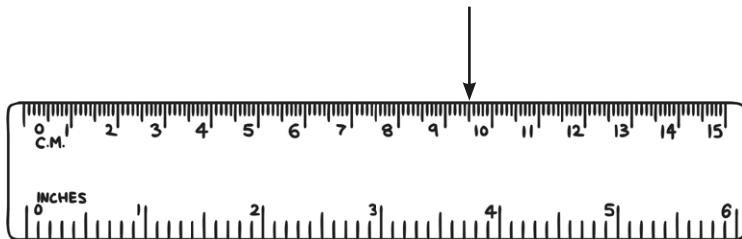
Section 5

How many right angles make a half turn?



Section 6

How many cm is the arrow pointing to? Now write the measurement in mm.



cm

mm

Section 7

Asha bought a bag priced at £13.25. She paid with a £20 note. How much change will she have?

Section 8

How many faces does a square based pyramid have? Draw your square-based pyramid here:

Year 3 Maths Activity Mat: 1

Answers

Section 1

$$724 + 106 = \boxed{830}$$


$$406 + \boxed{233} = 639$$

Section 2

$$\text{What is } \frac{2}{8} \text{ of } 24? \quad \boxed{6}$$

$$\text{What is } \frac{2}{10} \text{ of } 90? \quad \boxed{18}$$

Section 3



What time is this? 11:27

What time will it be in 2 hours and ten minutes? 1:37

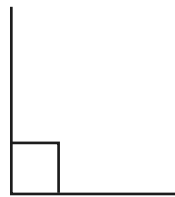
Section 4

At Bessie's Farm, 310 eggs were collected. 216 of them were sold. How many eggs were left?

	H	T	O
	3	1	0
–	2	1	6
		9	4

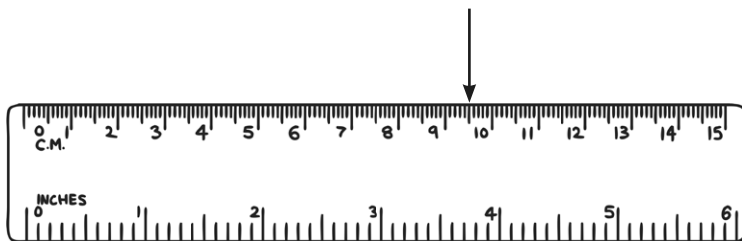
Section 5

How many right angles make a half turn?

2

Section 6

How many cm is the arrow pointing to? Now write the measurement in mm.

9.5cm95mm

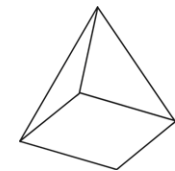
Section 7

Asha bought a bag priced at £13.25. She paid with a £20 note. How much change will she have?

£6.75

Section 8

How many faces does a square based pyramid have? Draw your square-based pyramid here:



5 faces