


Find a quarter



1 Colour a quarter and complete the sentences.

a




There are _____ apples.

There is _____ apple in each quarter.

A quarter of _____ is _____.

b

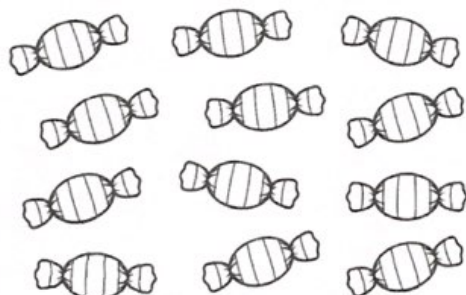


There are _____ badges.

There are _____ badges in each quarter.

A quarter of _____ is _____.

c




There are _____ sweets.

There are _____ sweets in each quarter.

A quarter of _____ is _____.

d



There are _____ bears.

There are _____ bears in each quarter.

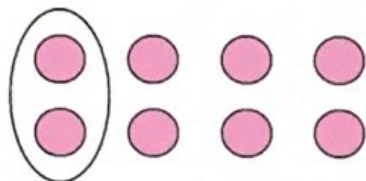
A quarter of _____ is _____.

Find a quarter



1 Use the sentences to draw the counters, circle a quarter, then complete the sentences.

a



There are 8 counters.

There is _____ counters in each quarter.

A quarter of _____ is _____.

b

There are 12 counters.

There are _____ counters in each quarter.

A quarter of _____ is _____.

c

There are 4 counters.

There is _____ counter in each quarter.

A quarter of _____ is _____.

d

There are 16 counters.

There are _____ counters in each quarter.

A quarter of _____ is _____.