

Comparing time



- 1 Year 1 recorded the time it took them to complete a race.
Circle faster or slower to compare their times.

a



Jess:
30 seconds

Dom is slower / faster than Sue.



Dom:
40 seconds

Sue is slower / faster than Jess.



Sue:
20 seconds

Jess is slower / faster than Dom.

Dom is slower / faster than Jess.

b



Che:
20 seconds

Che is slower / faster than Kat.



Kat:
23 seconds

Kat is slower / faster than Matt.



Matt:
25 seconds

Matt is slower / faster than Che.

Kat is slower / faster than Che.

c



Beth:
32 seconds

Beth is slower / faster than Mo.



Mo:
24 seconds

Mo is slower / faster than Tam.



Tam:
27 seconds

Tam is slower / faster than Mo.




Mo is slower / faster than Beth.

Comparing time






- 1 Buses A, B and C leave the bus station in the morning.
Complete the sentences using **earlier** or **later** to compare their times.




a

Bus A		Bus A leaves _____ than Bus B.
Bus B		Bus B leaves _____ than Bus C.
Bus C		Bus C leaves _____ than Bus A.
		Bus B leaves _____ than Bus A.
		Bus A leaves _____ than Bus C.
		Bus C leaves _____ than Bus B.

b

Bus A		Bus A leaves _____ than Bus B.
Bus B		Bus B leaves _____ than Bus C.
Bus C		Bus C leaves _____ than Bus A.
		Bus B leaves _____ than Bus A.
		Bus A leaves _____ than Bus C.
		Bus C leaves _____ than Bus B.

c

Bus A		Bus A leaves _____ than Bus B.
Bus B		Bus B leaves _____ than Bus C.
Bus C		Bus C leaves _____ than Bus A.
		Bus B leaves _____ than Bus A.
		Bus A leaves _____ than Bus C.
		Bus C leaves _____ than Bus B.