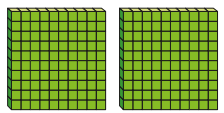
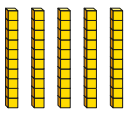



Subtract a 3-digit number from a 3-digit number – exchange

1 Complete the column subtractions.

a) $254 - 126$




Hundreds	Tens	Ones
		

	H	T	O
	2	5	4
-	1	2	6
	1	2	8

What exchange did you have to make?

1 ten for 10 ones.

b) $532 - 281$

Hundreds	Tens	Ones
		

	H	T	O
	5	3	2
-	2	8	1
	2	5	1

What exchange did you have to make?

1 hundred for 10 tens.

2 Which of these calculations need an exchange?
Tick your answers.

	H	T	O
	6	5	8
-	1	4	4

	H	T	O
	3	2	3
-	1	1	7

	H	T	O
	4	2	9
-	1	7	2

How do you know?

3 Work out the subtractions.

a) $735 - 218$

	H	T	O
	7	3	5
-	2	1	8
	5	1	7

c) $415 - 179$

	H	T	O
	4	1	5
-	1	7	9
	2	3	6

b) $428 - 163$

	H	T	O
	4	2	8
-	1	6	3
	2	6	5

d) $382 - 194$

	H	T	O
	3	8	2
-	1	9	4
	1	8	8

4 Talk about the mistake that has been made.

$$\begin{array}{r} 546 \\ - 283 \\ \hline 343 \end{array}$$

5 Complete the subtractions.

a)

	H	T	O
	6	7	0
-	5	4	6
	1	5	4

b)

	H	T	O
	8	0	5
-	1	7	9
	6	2	6

6 Work out the missing digits in these subtractions.


a)

	H	T	O
	6	7	5
-	3	4	2
	3	7	3

b)

	H	T	O
	3	4	0
-	1	2	8
	2	9	2

7 Two points are marked on a number line.



What is the difference between the two points?

$$677$$

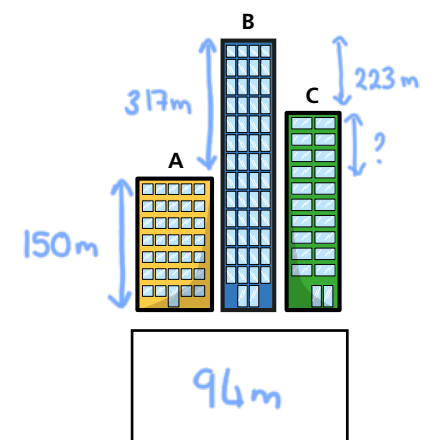
8 Find the missing numbers.

a) $179 + \boxed{416} = 595$ c) $95 + \boxed{637} + 138 = 870$

b) $718 - \boxed{370} = 348$ d) $\boxed{949} - 446 = 503$

9 Here are 3 buildings.

- A is 150 m tall
- B is 317 m taller than A
- C is 223 m shorter than B



How much taller is C than A?

10 Aisha buys these items.



How much change does she have from £1,000?

$$£188$$