

# Subtract 3-digit numbers from 3-digit numbers – no exchange

1 Complete the column subtractions.

a)  $358 - 226$

Hundreds	Tens	Ones

	H	T	O
	3	5	8
-	2	2	6

b)  $726 - 303$

H	T	O

	H	T	O
	7	2	6
-	3	0	3

2 Complete the subtractions.

a)

	H	T	O
	6	7	2
-	4	7	1

b)

	H	T	O
	5	6	3
-	1	5	1

3 Ron is working out  $785 - 257$

	H	T	O
	2	5	7
-	7	8	5

Do you agree with the way Ron has set out the subtraction?  
Why?

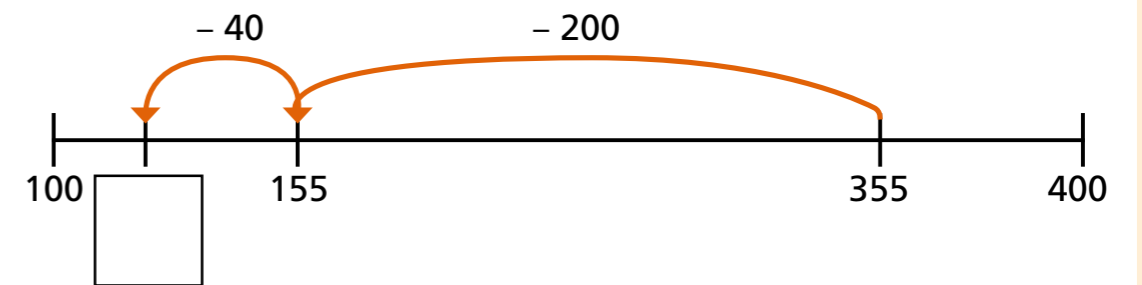
---



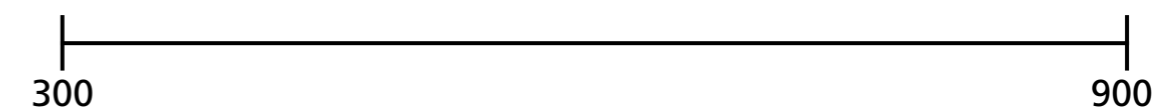
---

4 Use the number line to work out the subtraction.

a)  $355 - 240 = \square$



b)  $835 - 501 = \square$



- 5 A TV costs £120 less than this computer.  
How much does the TV cost?




- 6 There are 849 people at a concert.  
There are 625 adults at the concert.

a) How many children are at the concert?

b) How many more adults than children are at the concert?

- 7 What are the values of each of the shapes?

a)

	6	★	8
—	★	▲	▲
	●	1	5

★ =

● =

▲ =

b)

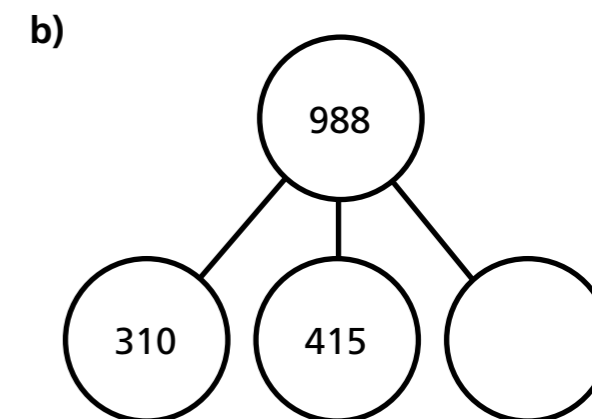
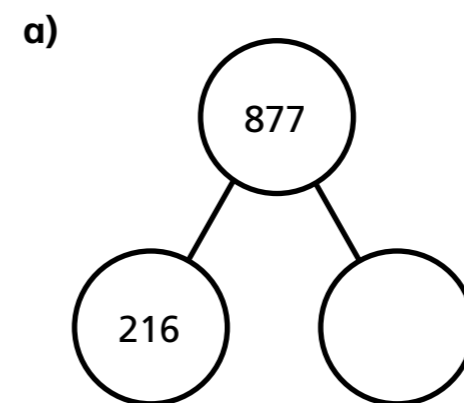
	9	+	◆
—	+	4	⬠
	◆	⬠	◆

+ =

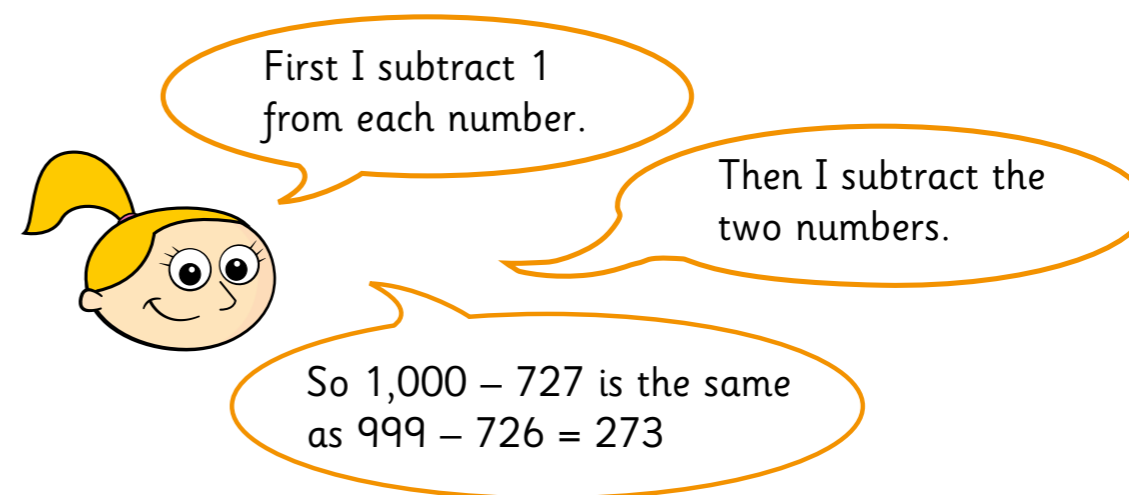
◆ =

⬠ =

- 8 Complete the part-whole models.



- 9 Eva is subtracting 727 from 1,000



Why does Eva's method work?

Talk about it with a partner.

Use Eva's method to complete the subtractions.

$1,000 - 285 =$

$1,000 - 188 =$

$800 - 636 =$